

Calculating Area

Find the area of the shapes.

1.

6 inches

3 inches



2.

7 inches

2 inches



3.

9 inches


1 inch



4.

4 inches


4 inches



5.

8 cm

2 cm



6.

7 cm


3 cm



7.

9 cm


7 cm



8.

4 miles


2 miles



9.

5 mile

1 mile



10.

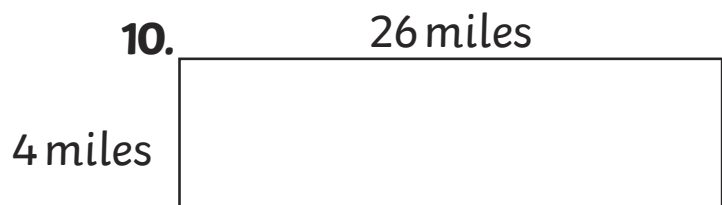
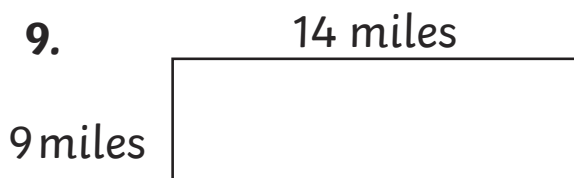
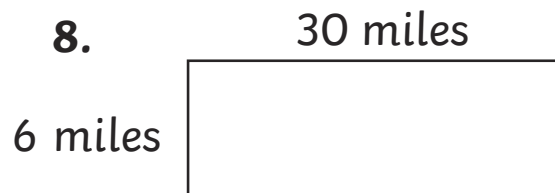
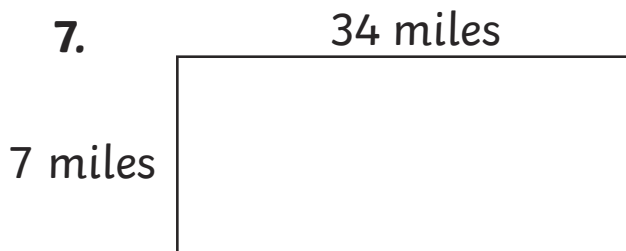
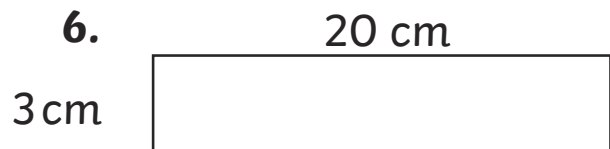
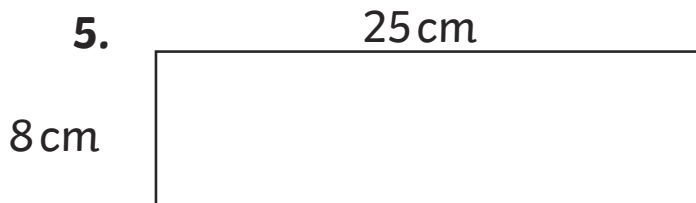
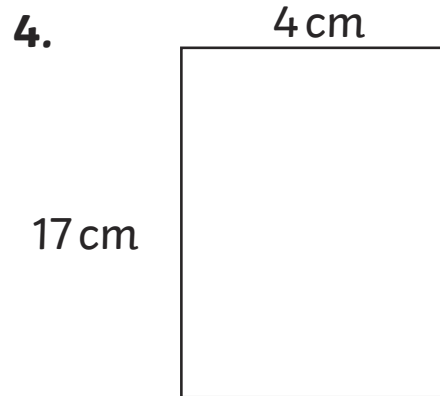
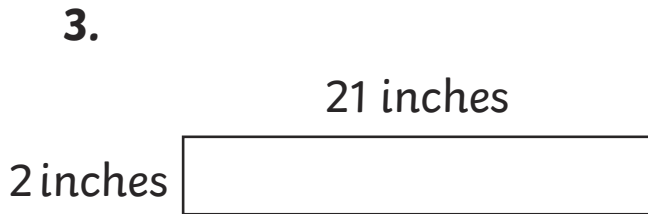
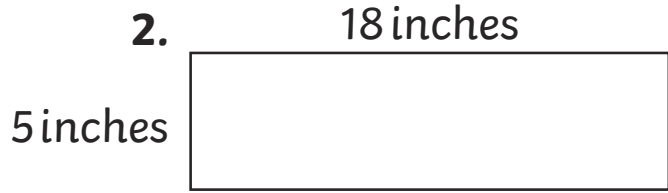

7 yards

4 yards



Calculating Area

Find the area of the shapes.



Calculating Area

Find the area of the shapes.

1.

18 cm

12 cm



2.

65 cm


21 cm



3.

71 cm


30 cm



4.

10 cm

33 cm



5.

54 cm

21 cm



6.

63 cm

32 cm



7.

79 cm

12 cm



8.

19 cm


18 cm



9.

17 cm

17 cm



10.

32 cm

29 cm

