

PLEASE REMEMBER TO HAND IN YOUR HOMEWORK ON WEDNESDAY.

Year 1 Homework



Write out and practise your spelling words four times. **You need to write down a sentence for every spelling word.**

Example:

Word: went

went

went

I went to school today.

Spelling words	X1	X2	X3	X4
made				
came				
same				
take				
safe				



This week, we have introduced our new word of the week, please practise spelling out the word a few times and writing down the definition.
















Our word of the week this week is: **Twilight**

Definition: the soft glowing light from the sky when the sun is below the horizon.




















This week in maths, year 1 have continued learning how to subtract numbers from 20. Have a go at filling in the missing answers; you can use the number line to help you.

Ten Frame Subtraction Worksheet

















14 apples and 3 have been crossed out, how many left? Write your answer in the box.

$14 - 3 =$



















				
				
				
				

Read the number sentence and cross out the correct number to work out your answer.

$17 - 12 =$
















				
				
				
				

$16 - 7 =$

Read the number sentence and cross out the correct number to work out your answer.

$18 - 10 =$

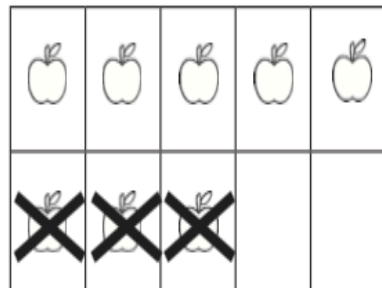
Read the number sentence and cross out the correct number to work out your answer.

$15 - 8 =$

Can you write your own question? Choose a food or shape to colour on the ten frame, cross some out and write your number sentence to show your answer.

$_ - _ = _$

PLEASE REMEMBER TO HAND IN YOUR HOMEWORK ON WEDNESDAY.



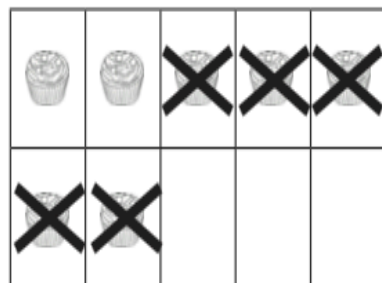
8 apples in total, 3 have been crossed out, how many left? Show your answer in the box.

$$8 - 3 =$$




Read the number sentence and cross out the correct number to work out your answer.


$$15 - 3 =$$



$$7 - 5 =$$



$$19 - 9 =$$



13 strawberries in total, 2 have been crossed out, how many left? Show your answer in the box.

$$13 - 2 =$$



$$17 - 8 =$$